



## **Final Term Exam**

**Course Name:** Object Oriented Software Analysis and Design

**Submitted By:**

Hamza Riaz (12282)

BS (SE-8) Section: A

**Submitted To:**

Sir Fahimullah

**Dated:** 23<sup>rd</sup> June 2020

**Department of Computer Science,  
IQRA National University, Peshawar Pakistan**

# Final Term Exam

Note: Attempt all question

June 23, 2020

## Q1: Draw Use Case diagram

10 Marks

Propose a use case diagram for a vending machine that sells beverages and snacks. Make use of inclusion and extension associations and remember that a vending machine may need technical assistance from time to time.

## Q2: Draw Sequence Diagram

10 Marks

Model a scenario of the Withdraw Money use case of a Bank ATM system. The user is able to make withdrawal of money. The system employs a standard procedure of validating the card and account holder's password.

## Q3: Draw State chart diagram

10 Marks

ATM is initially turned off. After the power is turned on, ATM performs startup action and enters Self Test state. If the test fails, ATM goes into Out of Service state, otherwise transition to the Idle state. In this state ATM waits for customer interaction. The ATM state changes from Idle to Serving Customer when the customer inserts banking or credit card in the ATM's card reader. On entering the Serving Customer state that is composed of basic ATM functions i.e authentication, money withdrawal etc

## Q4: Draw Class Diagram

10 Marks

Illustrate Class diagram for ATM Machine. The various Classes involved in the system are: Bank, Account, Customer Info, Debit Card, Current Account, Saving Account,

ATM Info, ATM Transaction, Withdraw Transaction, Change Pin, Transfer Money, Check Balance. The Bank maintains personal and ATM information of each customer. The customer can access their account using Debit Card issued by the Bank. In this system there could be two types of Account: Current Account and

Saving Account. Both use to share many of the properties and methods. The ATM Machine can perform multiple transactions such as Withdrawing cash, change pin, check balance and Transfer Money to each account.

## Q5: Design Pattern

10 Marks

Suppose we have the following java files. Identify the pattern also Considering the java files draw class diagram.

### *Shape.java*

```
public interface Shape {  
    void draw();  
}
```

### *Rectangle.java*

```
public class Rectangle implements Shape {  
  
    @Override  
    public void draw() {  
        System.out.println("Shape: Rectangle");  
    }  
}
```

### *Circle.java*

```
public class Circle implements Shape {  
  
    @Override  
    public void draw() {  
        System.out.println("Shape: Circle");  
    }  
}
```

### *ShapeDecorator.java*

```
public abstract class ShapeDecorator implements Shape {  
    protected Shape decoratedShape;  
  
    public ShapeDecorator(Shape decoratedShape){  
        this.decoratedShape = decoratedShape;  
    }  
  
    public void draw(){  
        decoratedShape.draw();  
    }  
}
```

*RedShapeDecorator.java*

```
public class RedShapeDecorator extends ShapeDecorator {

    public RedShapeDecorator(Shape decoratedShape) {
        super(decoratedShape);
    }

    @Override
    public void draw() {
        decoratedShape.draw();
        setRedBorder(decoratedShape);
    }

    private void setRedBorder(Shape decoratedShape){
        System.out.println("Border Color: Red");
    }
}
```

*DecoratorPatternDemo.java*

```
public class DecoratorPatternDemo {
    public static void main(String[] args) {

        Shape circle = new Circle();

        Shape redCircle = new RedShapeDecorator(new Circle());

        Shape redRectangle = new RedShapeDecorator(new Rectangle());
        System.out.println("Circle with normal border");
        circle.draw();

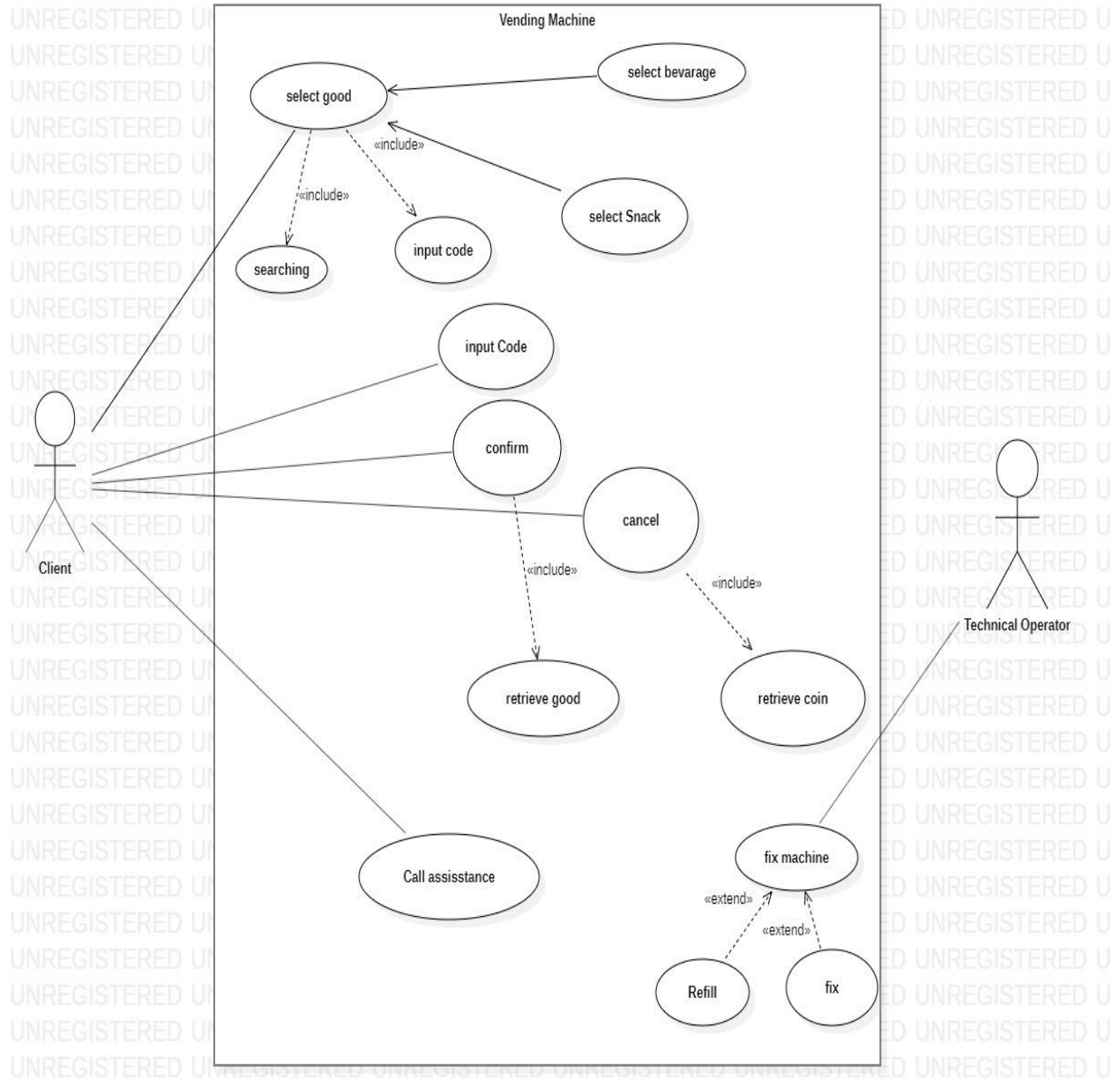
        System.out.println("\nCircle of red border");
        redCircle.draw();

        System.out.println("\nRectangle of red border");
        redRectangle.draw();
    }
}
```

Q1

Answer:

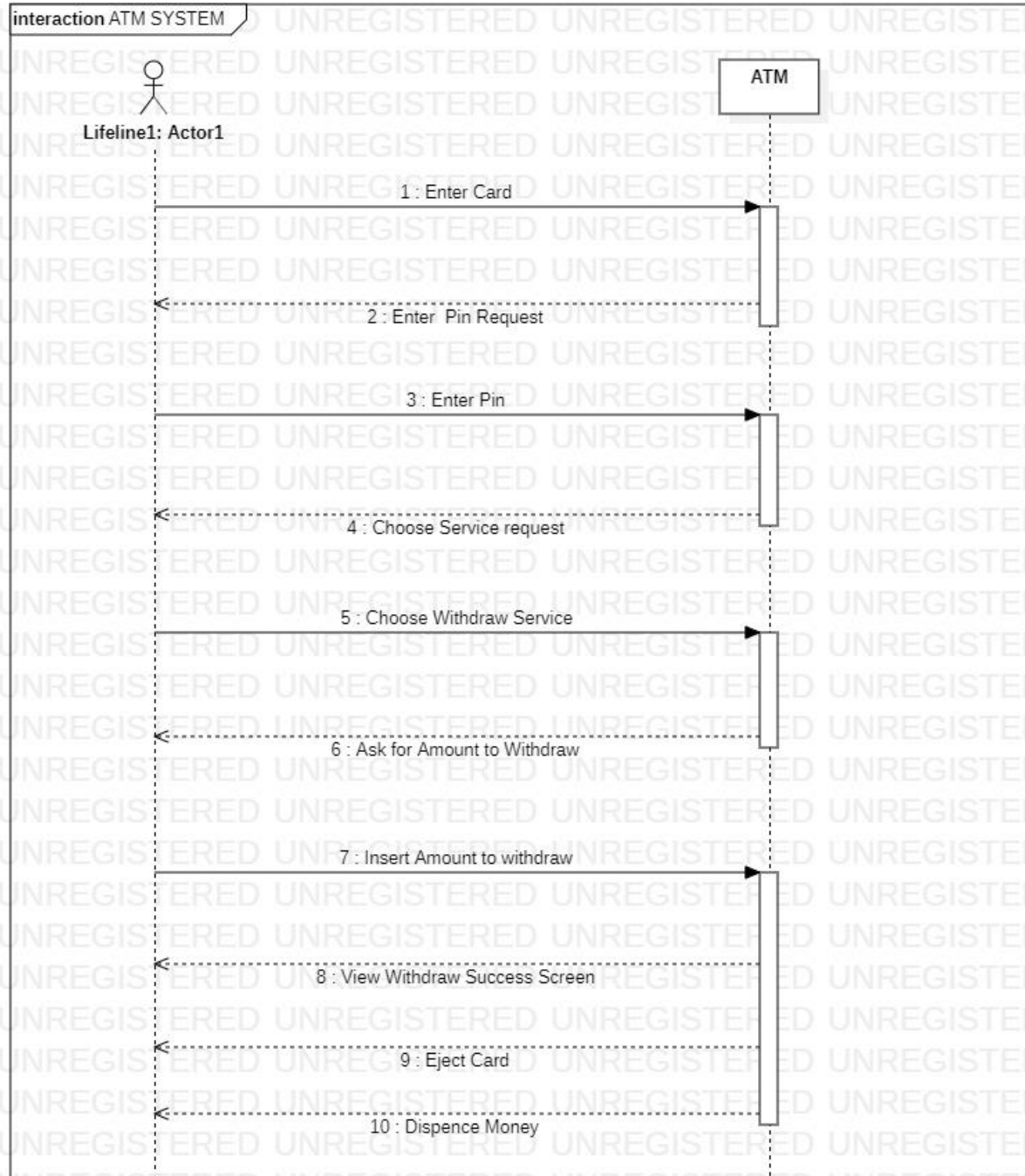
### UseCase Diagram



Q2

Answer:

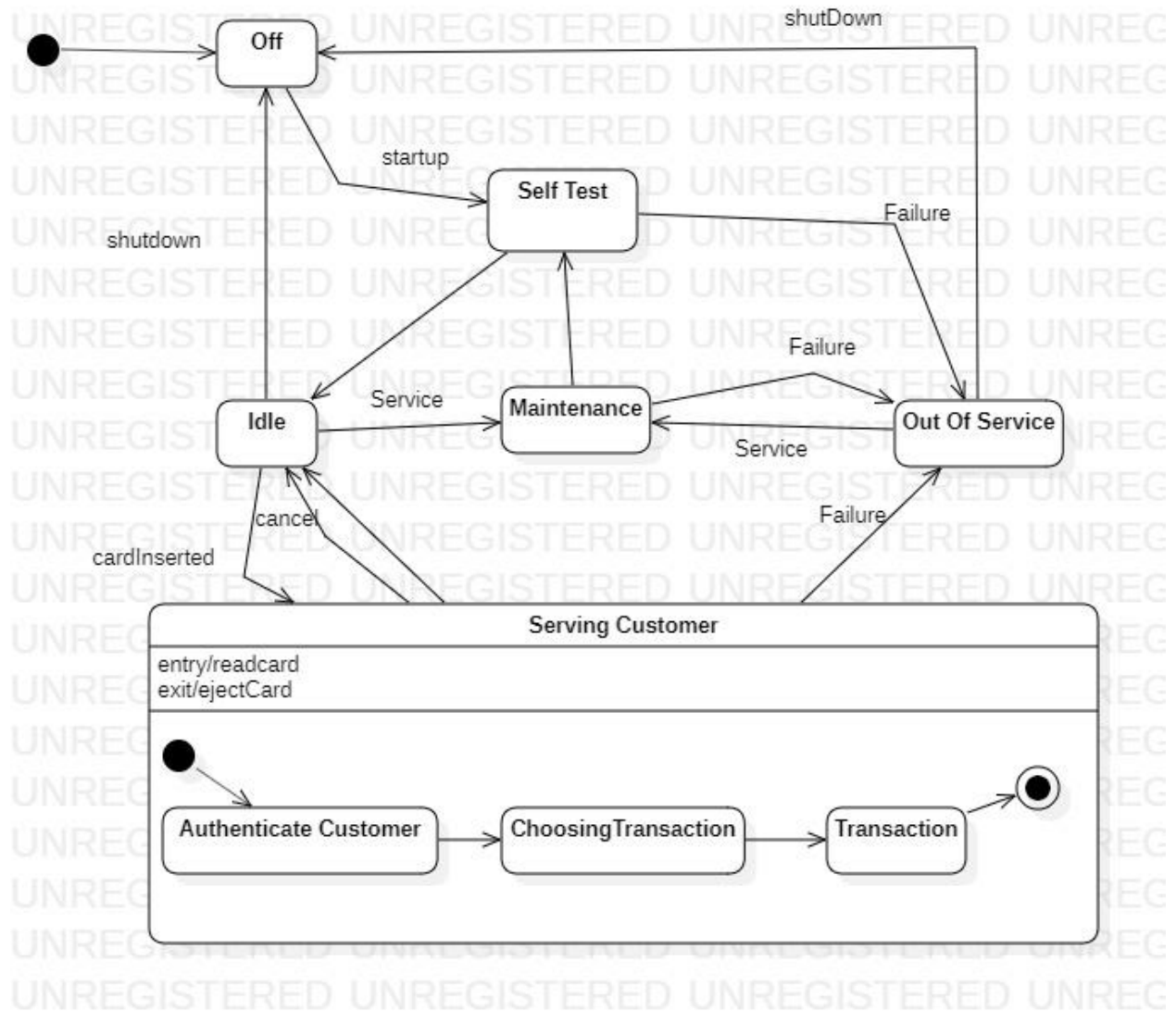
### Sequence Diagram



Q3

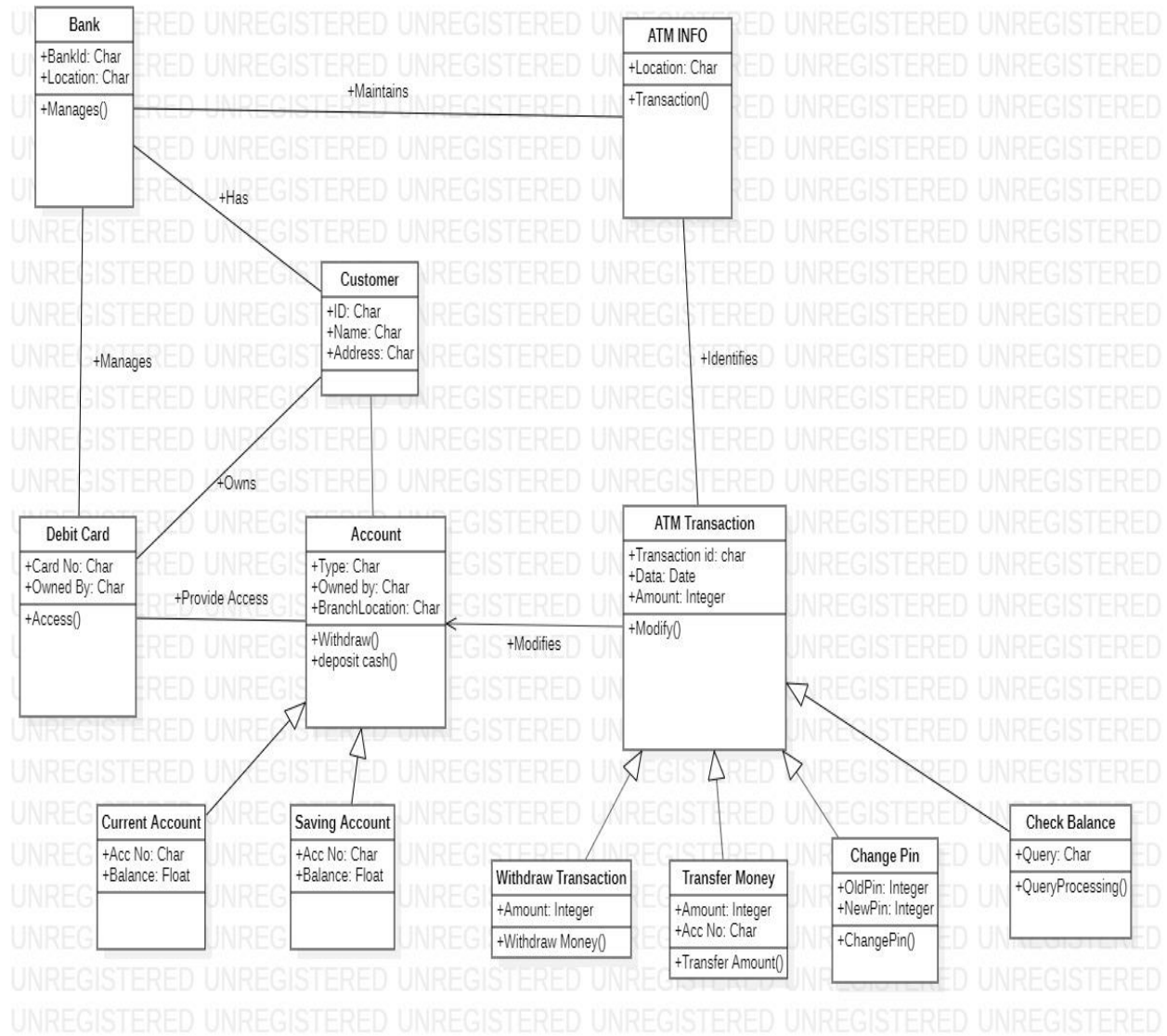
Answer:

**State chart Diagram**



**Q4**  
**Answer:**

**Class Diagram**





Q5

Answer:

### Design Pattern

