

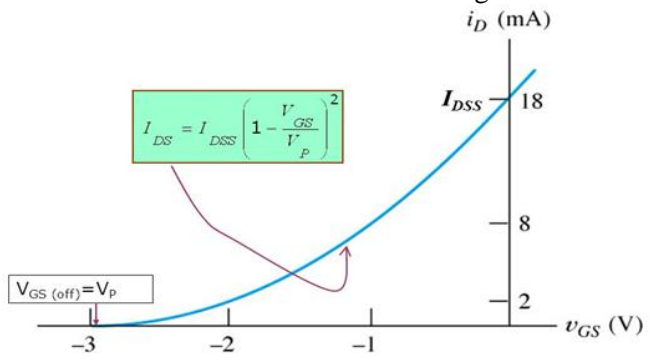
Department of Electrical Engineering
Sessional Assignment
Date: 04/05/2020

Course Details

Course Title:	<u>ELECTRONIC CIRCUIT DESIGN</u>	Module:	<u>4</u>
Instructor:	<u>SIR MUJTABA IHSAN</u>	Total	<u>20</u>
		Marks:	

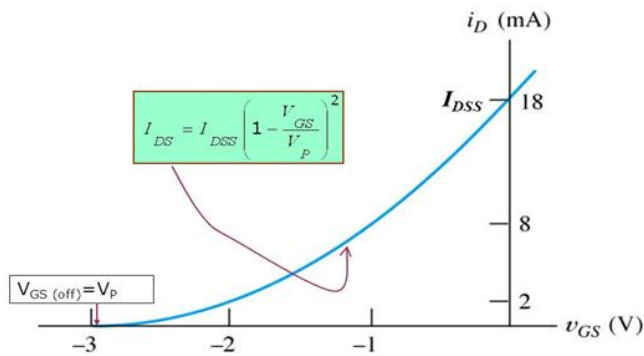
Student Details

Name:	<u>RAFI UD DIN</u>	Student ID:	<u>12401</u>
--------------	--------------------	--------------------	--------------

Q1		<p>Explain the trans conductance curve for n-channel JFET given below</p> 	Marks 04 CLO 1
Q2		<p>State the characteristics of a practical operational amplifier.</p>	Marks 04 CLO 1
Q3		<p>Calculate output voltage for summing amplifier if $V_1 = 0.2V$, $V_2 = 0.5V$ and $V_3 = 2V$ and $R_1=R_2=R_3=R_f = 6k\Omega$</p>	Marks 05 CLO 2
Q4	(a)	<p>You are working on an audio circuit in the lab. Which class of power amplifier will you not consider for your work? Justify your answer with reason.</p>	Marks 04 CLO 2
	(b)	<p>Outline the differences between an amplifier and a rectifier.</p>	Marks 03 CLO 2

Question (1):

Explain the trans conductance curve for n-channel JFET given below?



Answer:

The Trans conductance curve of a JFET transistor is the graph of the drain current I_D versus the gate-source voltage, V_{GS} .

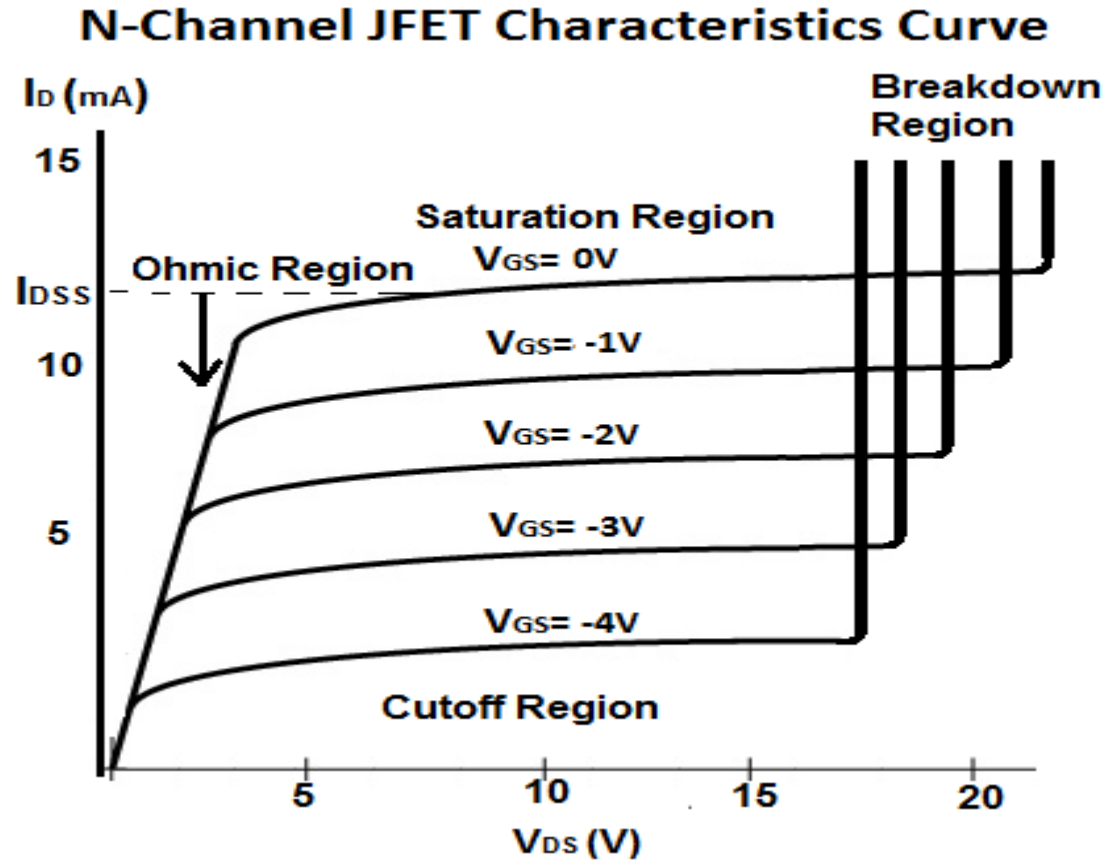
The ratio of change in drain current, ΔI_D , to the change in gate-source voltage, ΔV_{GS} , is the trans conductance, gm.

The unit of trans conductance is the Siemen (S). It is the reciprocal of resistance (Ω).

The trans conductance curve, as for all semiconductor devices, is nonlinear, for most of the curve, meaning changes to V_{GS} do not directly increase or decrease drain current, I_D .

Below are the trans conductance curves of N-Channel JFET transistors and P-Channel JFET Transistors.

The Regions that make up a trans conductance curve are the following:



Ohmic Region:

This is the region where the JFET transistor begins to show some resistance to the drain current, I_D that is beginning to flow from drain to source. This is the only region in the curve where the response is linear.

Saturation Region:

This is the region where the JFET transistor is fully operation and maximum current, for the voltage, V_{GS} , that is supplied is flowing. During this region, the JFET is active and ON.

Breakdown Region:

This is the region where the voltage, V_{DD} that is supplied to the drain of the transistor exceeds the necessary maximum. At this point, the JFET loses its ability to resist current because too much voltage is applied across its drain-source terminals. The transistor breaks down and current flows from drain to source.

Cutoff Region:

This is the region where the JFET transistor is off, meaning no drain current, I_D flows from drain to source.

Question(2):

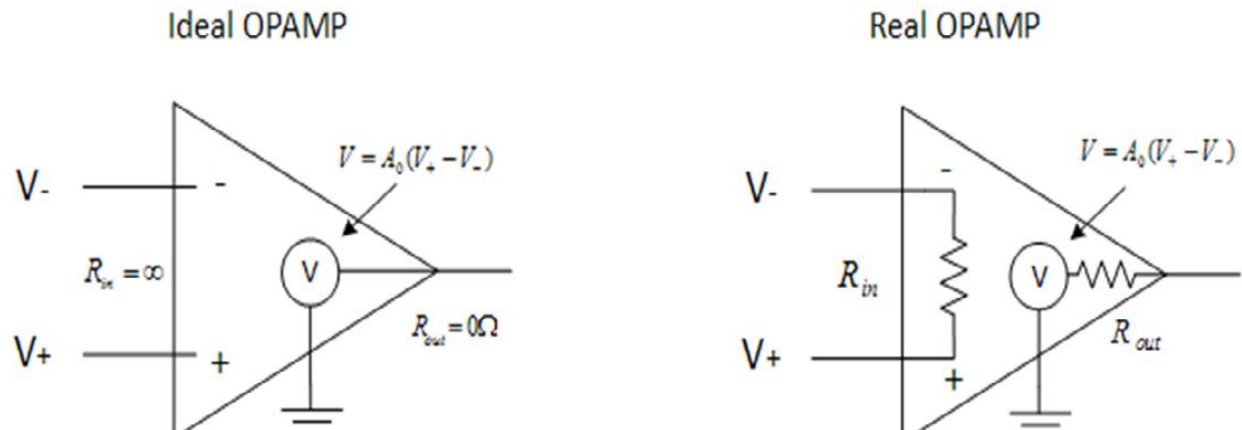
State the characteristics of a practical operational amplifier?

Answer:

Practical Op Amp Characteristics:

- 1) It has very Low output impedance.
- 2) It has both voltage and current limitations.
- 3) It has High voltage gain
- 4) It has High input impedance
- 5) Generation of unwanted signals (noise).

The Practical Op Amp Characteristics are little bit different than the ideal op-amp characteristics. The various characteristics of a practical op-amp can be described as below.



Open loop gain :

It is the voltage gain of the op-amp when no feedback is Practically it is several thousands.

Input impedance :

It is finite and typically greater than 1 M Ω . But using FETs for the input stage, it can be increased up to several hundred M

Output impedance :

It is typically few hundred ohms. With the help of negative feedback, it can be reduced to a very small value like 1 or 2 ohms.

Bandwidth:

The bandwidth of practical op-amp in open loop configuration is very small. By application of negative feedback, it can be increased to a desired value.

Input bias current:

For ideal op-amp, no current flows into the input the practical op-amps do have some input currents which are very small, of the order of 10^{-6} A to 10^{-14} A.

Most of the op-amps use differential amplifier as the input stage. The two transistors of the differential amplifier must be biased correctly. But practically, it is not possible to get exact matching of the two transistors. Thus, the input terminals which are the base terminals of the two transistors, do conduct the small DC. current. These small base currents of the two transistors are nothing but bias currents denoted as I_{b1} and I_{b2} .

So the input bias current can be defined as the current flowing into each of the two input terminals when they are biased to the same voltage level i.e. when the op-amp is balanced.

The two input currents, when op-amp is balanced, are shown The two bias currents are never same hence the manufacturers specify the average input bias current I_b , which is found by adding the magnitudes of I_{b1} and I_{b2} and dividing the sum by 2.

Mathematically it is expressed:

$$I_b = \frac{|I_{b1}| + |I_{b2}|}{2}$$

Input offset current:

The difference in magnitudes of I_{b1} and I_{b2} is called as input offset current and is denoted as I_Q . Thus,

$$I_{ios} = |I_{b1} - I_{b2}|$$

The magnitude of this current is very small, of the order of 20 to 60 nA. It is measured under the condition that input voltage to op-amp is zero.

If we supply equal DC currents to the two inputs, output voltage of op-amp must be zero. But practically, there exists some voltage at the output. To make it zero, the two input currents are made to differ by small amount. This difference is nothing but the input offset current.

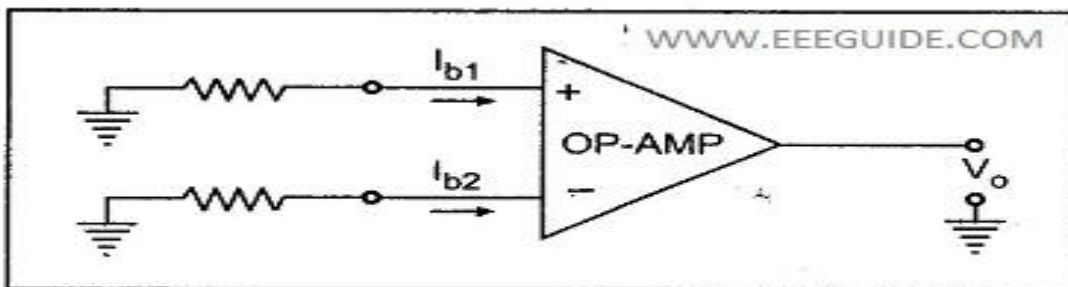


Fig. 2.9 Input bias currents

Question(3):

Calculate output voltage for summing amplifier if $V_1 = 0.2V$, $V_2 = 0.5V$ and $V_3 = 2V$ and $R_1=R_2=R_3=R_f = 6k\Omega$.

Answer:**TO Find:**

The output voltage for summing amplifier.

Solution:

According to Ohm's Law $V=IR$

$$V_1=I_1 R_1$$

Therefore

$$I_1=V_1/R_1$$

$$I_2=V_2/R_2$$

$$I_3=V_3/R_3$$

Putting the values

$$V_{out} = - [V_1/R_1 + V_2/R_2 + V_3/R_3] R_f \dots\dots\dots$$

If the three resistors are equal i.e. $R_1=R_2=R_3=R_f=R$

$$V_{out} = - [V_1/R + V_2/R + V_3/R] R$$

$$V_{out} = - [V_1 + V_2 + V_3] \dots\dots\dots$$

$$V_{out} = - [V_1 + V_2 + V_3 \dots\dots\dots V_n]$$

So putting the value in eq.

$$V_{out} = - [V_1/R + V_2/R + V_3/R] R$$

$$V_{out} = -[0.2/6 + 0.5/6 + 2/6]6$$

Question(4):

Part (a):

You are working on an audio circuit in the lab. Which class of power amplifier will you not consider for your work? Justify your answer with reason.

Answer:

- 1) Class C amplifiers are never used for audio circuits.
- 2) Class C amplifiers operate the output transistor in a state that results in tremendous distortion (it would be totally unsuitable for audio reproduction).
- 3) They are commonly used in RF circuits.
- 4) However, the RF circuits where Class C amplifiers are used, employ filtering so that the final signal is completely acceptable.

Reason:

Class-C:

Output device(s) conduct for less than 180 degrees (100 to 150 degrees typical) - Radio Frequencies only - cannot be used for audio! This is the sound heard when one of the output devices goes open circuit in an audio amp! See Figure 1, showing the time the output device conducts.

Question(4):**PART (b):**

Outline the differences between an amplifier and a rectifier?

Answer:**Amplifiers:**

An Amplifier is an electronic device that increases the voltage current or boosts voltage, current or power of a signal.

Application:

Audio amplifiers, hearing aids, automation, music systems, Operational Amplifiers.

RECTIFIERS:

An electrical device which converts an alternating current into a direct one.

Or

A rectifier is an electrical device composed of one or more diodes that converts alternating current (AC) to direct current (DC). A diode is like a one-way valve that allows an electrical current to flow in only one direction. This process is called rectification.

APPLICATIONS:

The application of rectifiers is to derive DC power from an AC supply (AC to DC converter). Rectifiers are used inside the power supplies of virtually all electronic equipment. AC/DC power supplies may be broadly divided into linear power supplies.

Uses:

Rectifiers are used as components of power supplies and as detectors of radio signals. Rectifiers may be made of solid state diodes, vacuum tube diodes, mercury arc valves, and other technologies.